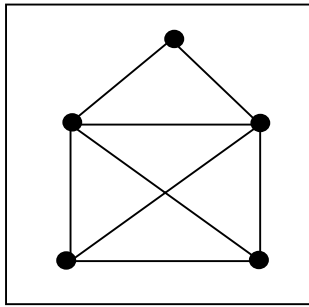
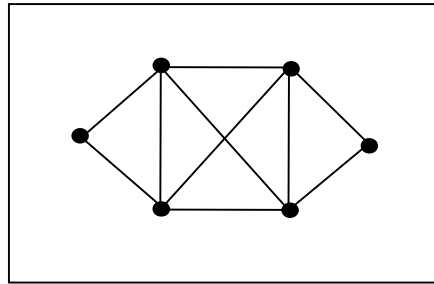


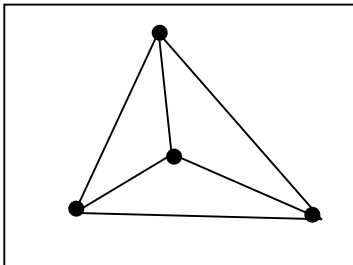
Preencha as tabelas de acordo com os graus dos vértices



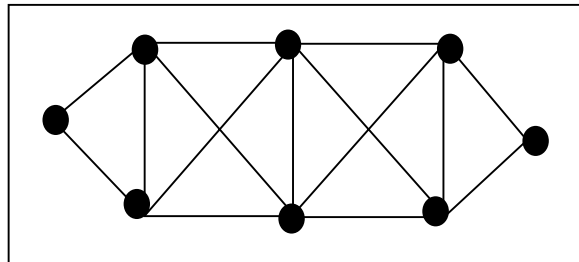
Vértice	grau
A	3
B	4
C	2
D	4
E	3
Soma	16
No. de arestas	8
No. de vértices de grau ímpar	2



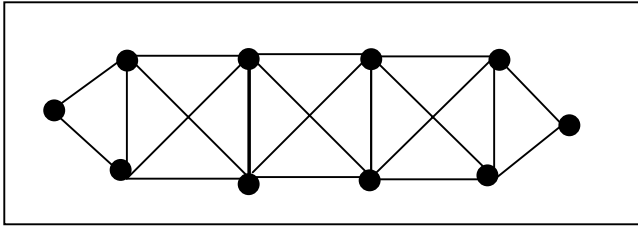
Vértice	grau
A	
B	
C	
D	
E	
F	
Soma	
No. de arestas	
No. de vértices de grau ímpar	



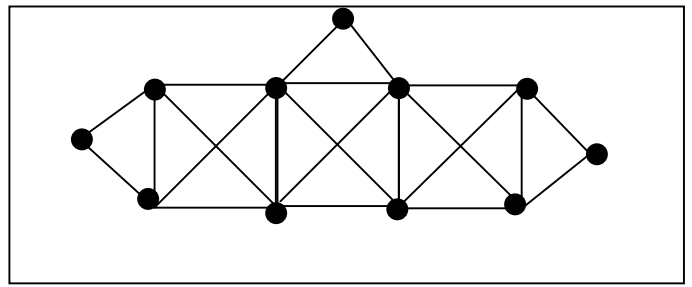
Vértice	grau
A	
B	
C	
D	
Soma	
No. de arestas	
No. de vértices de grau ímpar	



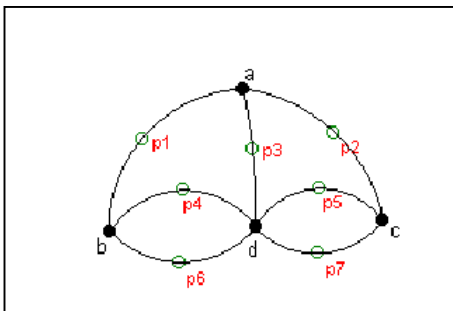
Vértice	grau
A	
B	
C	
D	
E	
F	
G	
H	
Soma	
No. de arestas	
No. de vértices de grau ímpar	



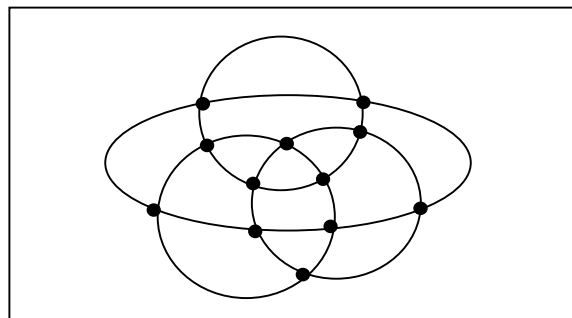
Vértice	grau
A	
B	
C	
D	
E	
F	
G	
H	
I	
J	
Soma	
No. de arestas	
No. de vértices de grau ímpar	



Vértice	grau
A	
B	
C	
D	
E	
F	
G	
H	
I	
J	
K	
Soma	
No. de arestas	
No. de vértices de grau ímpar	



Vértice	grau
A	
B	
C	
D	
Soma	
No. de arestas	
No. de vértices de grau ímpar	



Vértice	grau
A	
B	
C	
D	
E	
F	
G	
H	
I	
J	
K	
Soma	
No. de arestas	
No. de vértices de grau ímpar	

